

# Unit 2, Station 3, Round 2, Task 2




Fraction, Decimal

Name: **Answer Key**

Determine the value written as a fraction , decimal


Answer

Ex)




Fraction  $\frac{61}{100}$   
Decimal  $0.61$

1)




Fraction  $\frac{41}{100}$   
Decimal  $0.41$

2)



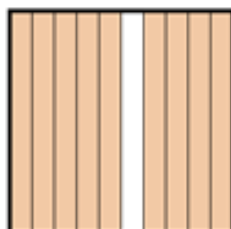
Fraction  $\frac{54}{100}$   
Decimal  $0.54$

3)




Fraction  $\frac{98}{100}$   
Decimal  $0.98$

4)




Fraction  $\frac{9}{10}$   
Decimal  $0.9$

5)



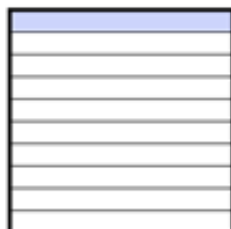
Fraction  $\frac{5}{10}$   
Decimal  $0.5$

6)




Fraction  $\frac{30}{100}$   
Decimal  $0.30$

7)




Fraction  $\frac{1}{10}$   
Decimal  $0.1$

8)




Fraction  $\frac{79}{100}$   
Decimal  $0.79$

9)




Fraction  $\frac{6}{10}$   
Decimal  $0.6$

10)



Fraction  $\frac{4}{10}$   
Decimal  $0.4$

11)



Fraction  $\frac{7}{10}$   
Decimal  $0.7$